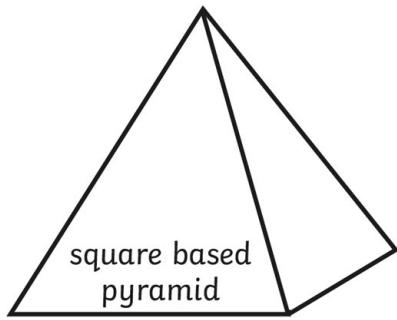


3D Shapes

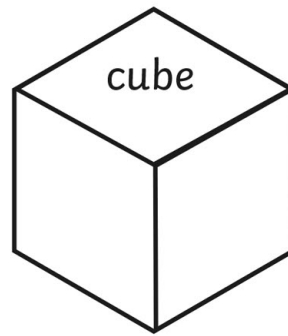
name



edges _____

faces _____

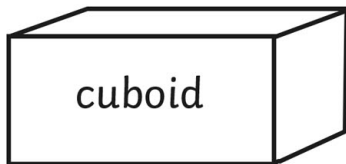
vertices _____



edges _____

faces _____

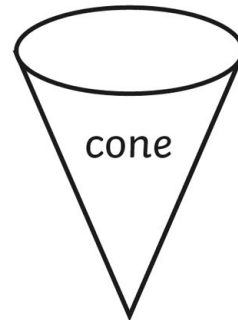
vertices _____



edges _____

faces _____

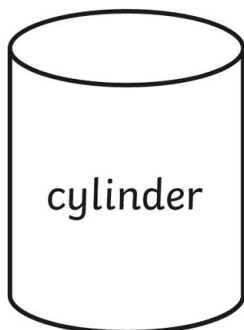
vertices _____



edges _____

faces _____

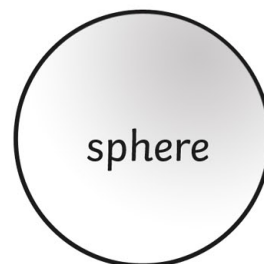
vertices _____



edges _____

faces _____

vertices _____

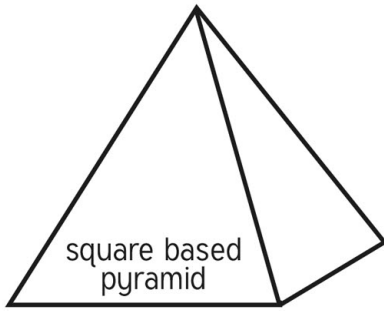


edges _____

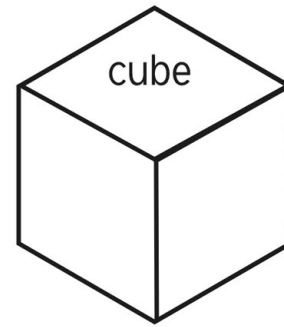
faces _____

vertices _____

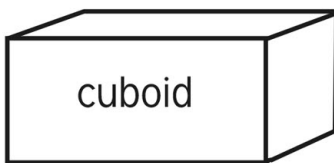
3D Shapes - Answer Sheet



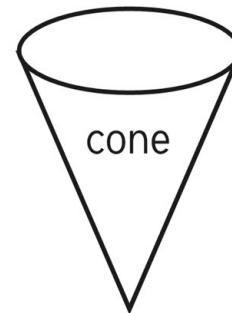
edges - 8
faces - 5
vertices - 5



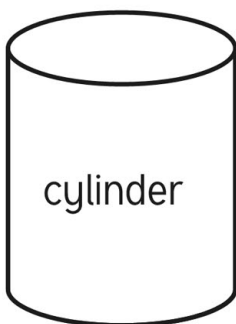
edges - 12
faces - 6
vertices - 8



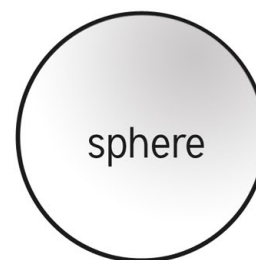
edges - 12
faces - 6
vertices - 8



edges - 1
faces - 2
vertices - 1



edges - 2
faces - 3
vertices - 0



edges - 0
faces - 1
vertices - 0